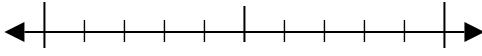


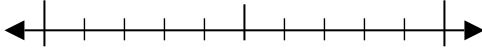


Use the numberlines to round each number to the nearest 10.

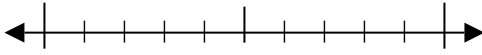
Ex) 76



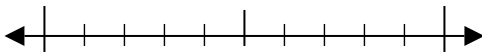
1) 10



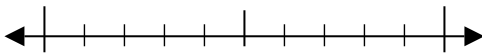
2) 39



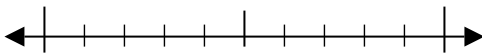
3) 23



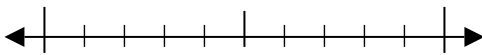
4) 998



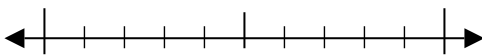
5) 285



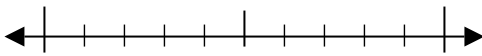
6) 200



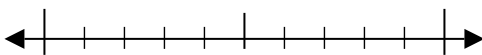
7) 703



8) 3,817



9) 9,845



Answers

Ex. 80

1. _____

2. _____

3. _____

4. _____

5. _____

6. _____

7. _____

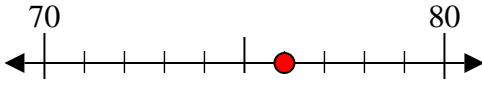
8. _____

9. _____

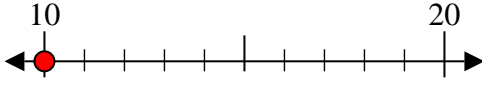


Use the numberlines to round each number to the nearest 10.

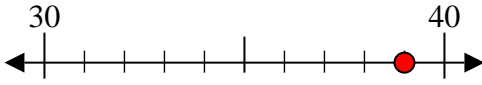
Ex) 76



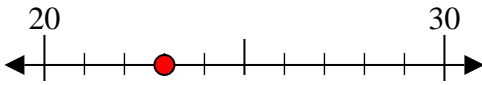
1) 10



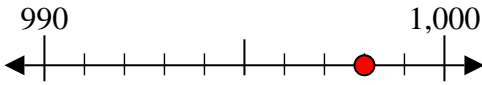
2) 39



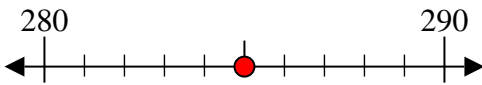
3) 23



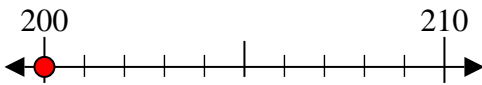
4) 998



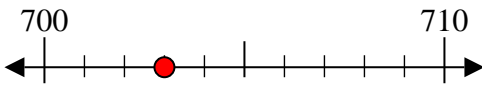
5) 285



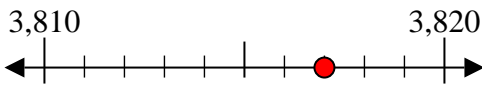
6) 200



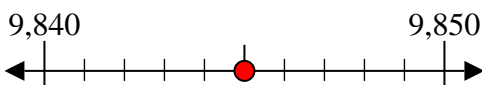
7) 703



8) 3,817



9) 9,845



Answers

Ex. 80

1. 10

2. 40

3. 20

4. 1,000

5. 290

6. 200

7. 700

8. 3,820

9. 9,850